

44. Solve the equation $|x - 1| = 1 - x$.

45. A proof of the triangle inequality. Give the reason justifying each of the numbered steps in the following proof of the triangle inequality.

$$\begin{aligned}
 |a + b|^2 &= (a + b)^2 & (1) \\
 &= a^2 + 2ab + b^2 \\
 &\leq a^2 + 2|a||b| + b^2 & (2) \\
 &\leq |a|^2 + 2|a||b| + |b|^2 & (3) \\
 &= (|a| + |b|)^2 \\
 |a + b| &\leq |a| + |b| & (4)
 \end{aligned}$$

46. Prove that $|ab| = |a||b|$ for any numbers a and b .

47. If $|x| \leq 3$ and $x > -1/2$, what can you say about x ?

48. Graph the inequality $|x| + |y| \leq 1$.

49. GRAPHER

- a) Graph the functions $f(x) = x/2$ and $g(x) = 1 + (4/x)$ together to identify the values of x for which

$$\frac{x}{2} > 1 + \frac{4}{x}.$$

- b) Confirm your findings in (a) algebraically.

50. GRAPHER

- a) Graph the functions $f(x) = 3/(x - 1)$ and $g(x) = 2/(x + 1)$ together to identify the values of x for which

$$\frac{3}{x - 1} < \frac{2}{x + 1}.$$

- b) Confirm your findings in (a) algebraically.

2

Coordinates, Lines, and Increments

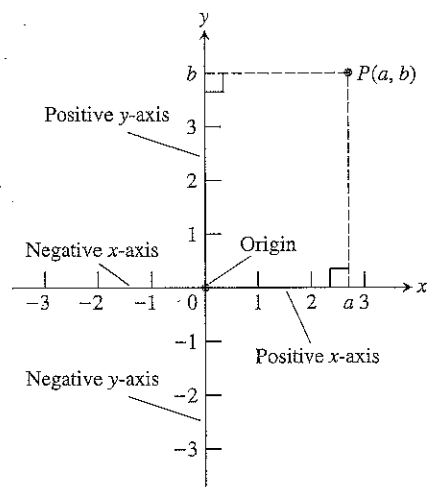
This section reviews coordinates and lines and discusses the notion of increment.

Cartesian Coordinates in the Plane

The positions of all points in the plane can be measured with respect to two perpendicular real lines in the plane intersecting in the 0-point of each (Fig. 5). These lines are called **coordinate axes** in the plane. On the horizontal x -axis, numbers are denoted by x and increase to the right. On the vertical y -axis, numbers are denoted by y and increase upward. The point where x and y are both 0 is the **origin** of the coordinate system, often denoted by the letter O .

If P is any point in the plane, we can draw lines through P perpendicular to the two coordinate axes. If the lines meet the x -axis at a and the y -axis at b , then a is the **x -coordinate** of P , and b is the **y -coordinate**. The ordered pair (a, b) is the point's **coordinate pair**. The x -coordinate of every point on the y -axis is 0. The y -coordinate of every point on the x -axis is 0. The origin is the point $(0, 0)$.

The origin divides the x -axis into the **positive x -axis** to the right and the **negative x -axis** to the left. It divides the y -axis into the **positive** and **negative y -axis** above and below. The axes divide the plane into four regions called **quadrants**, numbered counterclockwise as in Fig. 6.

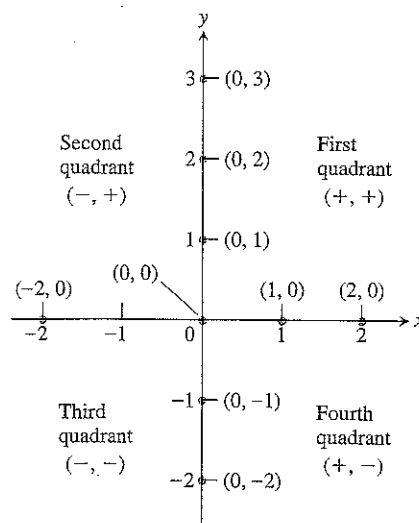


5 Cartesian coordinates.

A Word About Scales

When we plot data in the coordinate plane or graph formulas whose variables have different units of measure, we do not need to use the same scale on the two axes. If we plot time vs. thrust for a rocket motor, for example, there is no reason to place the mark that shows 1 sec on the time axis the same distance from the origin as the mark that shows 1 lb on the thrust axis.

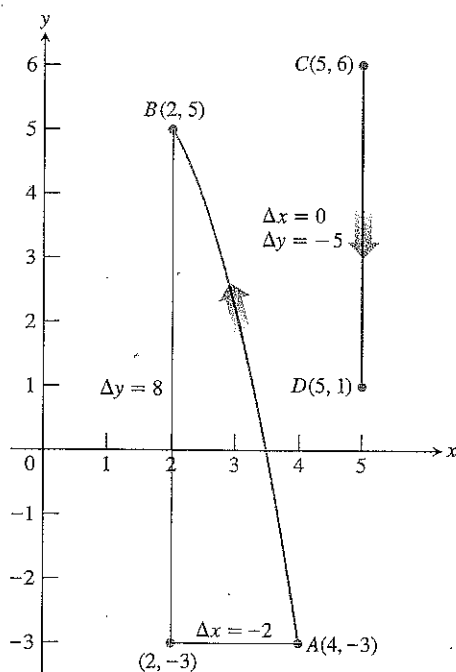
When we graph functions whose variables do not represent physical measurements and when we draw figures in the coordinate plane to study their geometry and trigonometry, we try to make the scales on the axes identical. A vertical unit



6 The points on the axes all have coordinate pairs, but we usually label them with single numbers. Notice the coordinate sign patterns in the quadrants.

of distance then looks the same as a horizontal unit. As on a surveyor's map or a scale drawing, line segments that are supposed to have the same length will look as if they do and angles that are supposed to be congruent will look congruent.

Computer displays and calculator displays are another matter. The vertical and horizontal scales on machine-generated graphs usually differ, and there are corresponding distortions in distances, slopes, and angles. Circles may look like ellipses, rectangles may look like squares, right angles may appear to be acute or obtuse, and so on. Circumstances like these require us to take extra care in interpreting what we see. High-quality computer software usually allows you to compensate for such scale problems by adjusting the *aspect ratio* (ratio of vertical to horizontal scale). Some computer screens also allow adjustment within a narrow range. When you use a grapher, try to make the aspect ratio 1, or close to it.



7 Coordinate increments may be positive, negative, or zero.

Increments and Distance

When a particle moves from one point in the plane to another, the net changes in its coordinates are called *increments*. They are calculated by subtracting the coordinates of the starting point from the coordinates of the ending point.

EXAMPLE 1 In going from the point $A(4, -3)$ to the point $B(2, 5)$ (Fig. 7), the increments in the x - and y -coordinates are

$$\Delta x = 2 - 4 = -2, \quad \Delta y = 5 - (-3) = 8. \quad \square$$

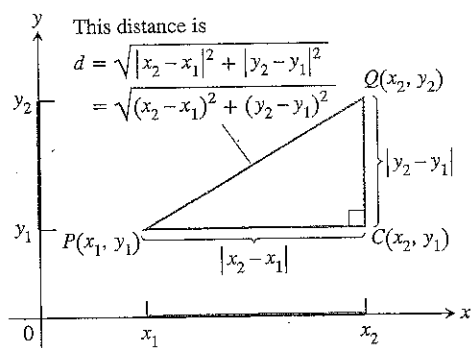
Definition

An **increment** in a variable is a net change in that variable. If x changes from x_1 to x_2 , the increment in x is

$$\Delta x = x_2 - x_1.$$

EXAMPLE 2 From $C(5, 6)$ to $D(5, 1)$ (Fig. 7) the coordinate increments are

$$\Delta x = 5 - 5 = 0, \quad \Delta y = 1 - 6 = -5. \quad \square$$



8 To calculate the distance between $P(x_1, y_1)$ and $Q(x_2, y_2)$, apply the Pythagorean theorem to triangle PCQ .

The distance between points in the plane is calculated with a formula that comes from the Pythagorean theorem (Fig. 8).

Distance Formula for Points in the Plane

The distance between $P(x_1, y_1)$ and $Q(x_2, y_2)$ is

$$d = \sqrt{(\Delta x)^2 + (\Delta y)^2} = \sqrt{(x_2 - x_1)^2 + (y_2 - y_1)^2}.$$

EXAMPLE 3

- a) The distance between $P(-1, 2)$ and $Q(3, 4)$ is

$$\sqrt{(3 - (-1))^2 + (4 - 2)^2} = \sqrt{(4)^2 + (2)^2} = \sqrt{20} = \sqrt{4 \cdot 5} = 2\sqrt{5}.$$

- b) The distance from the origin to $P(x, y)$ is

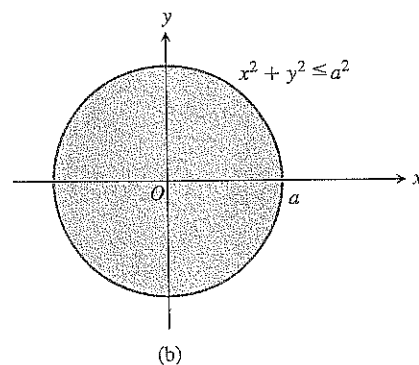
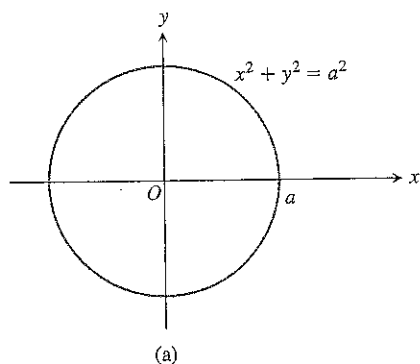
$$\sqrt{(x - 0)^2 + (y - 0)^2} = \sqrt{x^2 + y^2}.$$

Graphs

The graph of an equation or inequality involving the variables x and y is the set of all points $P(x, y)$ whose coordinates satisfy the equation or inequality.

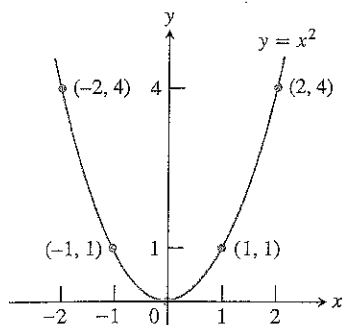
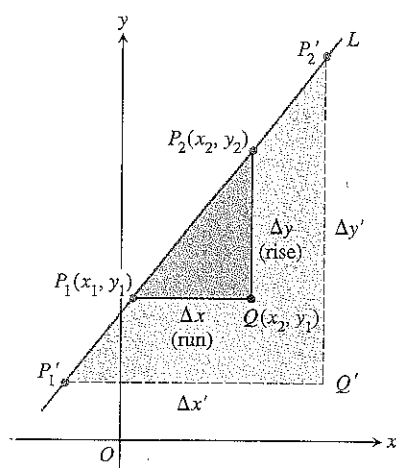
EXAMPLE 4 Circles centered at the origin

- a) If $a > 0$, the equation $x^2 + y^2 = a^2$ represents all points $P(x, y)$ whose distance from the origin is $\sqrt{x^2 + y^2} = \sqrt{a^2} = a$. These points lie on the circle of radius a centered at the origin. This circle is the graph of the equation $x^2 + y^2 = a^2$ (Fig. 9a).
- b) Points (x, y) whose coordinates satisfy the inequality $x^2 + y^2 \leq a^2$ all have distance $\leq a$ from the origin. The graph of the inequality is therefore the circle of radius a centered at the origin together with its interior (Fig. 9b).



9 Graphs of (a) the equation and (b) the inequality in Example 4.

The circle of radius 1 unit centered at the origin is called the **unit circle**.

10 The parabola $y = x^2$.11 Triangles P_1QP_2 and $P_1'Q'P_2'$ are similar, so

$$\frac{\Delta y'}{\Delta x'} = \frac{\Delta y}{\Delta x} = m.$$

12 The slope of L_1 is

$$m = \frac{\Delta y}{\Delta x} = \frac{6 - (-2)}{3 - 0} = \frac{8}{3}.$$

That is, y increases 8 units every time x increases 3 units. The slope of L_2 is

$$m = \frac{\Delta y}{\Delta x} = \frac{2 - 5}{4 - 0} = \frac{-3}{4}.$$

That is, y decreases 3 units every time x increases 4 units.

EXAMPLE 5 Consider the equation $y = x^2$. Some points whose coordinates satisfy this equation are $(0, 0)$, $(1, 1)$, $(-1, 1)$, $(2, 4)$, and $(-2, 4)$. These points (and all others satisfying the equation) make up a smooth curve called a parabola (Fig. 10). \square

Straight Lines

Given two points $P_1(x_1, y_1)$ and $P_2(x_2, y_2)$ in the plane, we call the increments $\Delta x = x_2 - x_1$ and $\Delta y = y_2 - y_1$ the **run** and the **rise**, respectively, between P_1 and P_2 . Two such points always determine a unique straight line (usually called simply a line) passing through them both. We call the line P_1P_2 .

Any nonvertical line in the plane has the property that the ratio

$$m = \frac{\text{rise}}{\text{run}} = \frac{\Delta y}{\Delta x} = \frac{y_2 - y_1}{x_2 - x_1}$$

has the same value for every choice of the two points $P_1(x_1, y_1)$ and $P_2(x_2, y_2)$ on the line (Fig. 11).

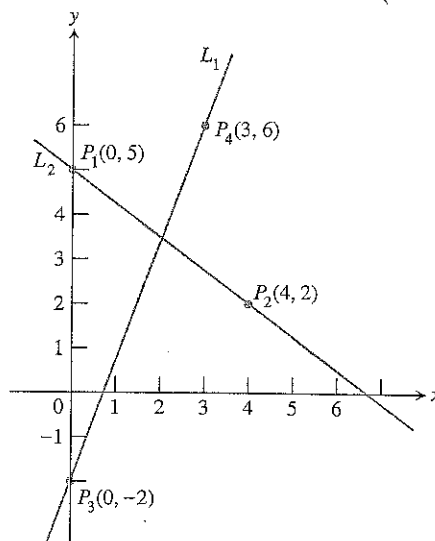
Definition

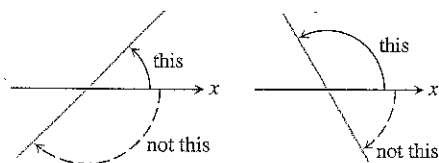
The constant

$$m = \frac{\text{rise}}{\text{run}} = \frac{\Delta y}{\Delta x} = \frac{y_2 - y_1}{x_2 - x_1}$$

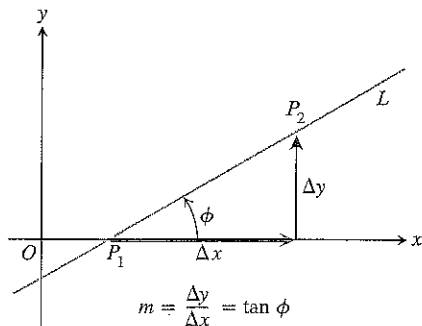
is the **slope** of the nonvertical line P_1P_2 .

The slope tells us the direction (uphill, downhill) and steepness of a line. A line with positive slope rises uphill to the right; one with negative slope falls downhill to the right (Fig. 12). The greater the absolute value of the slope, the more rapid the rise or fall. The slope of a vertical line is *undefined*. Since the run Δx is zero for a vertical line, we cannot form the ratio m .

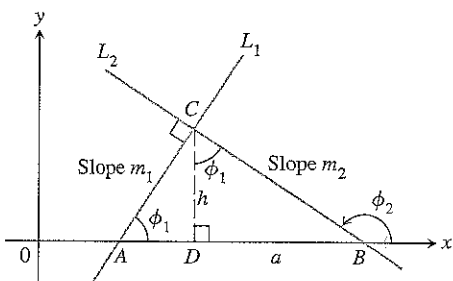




13 Angles of inclination are measured counterclockwise from the x -axis.



14 The slope of a nonvertical line is the tangent of its angle of inclination.



15 $\triangle ADC$ is similar to $\triangle CDB$. Hence ϕ_1 is also the upper angle in $\triangle CDB$. From the sides of $\triangle CDB$, we read $\tan \phi_1 = a/h$.

16 The standard equations for the vertical and horizontal lines through $(2, 3)$ are $x = 2$ and $y = 3$.

The direction and steepness of a line can also be measured with an angle. The **angle of inclination (inclination)** of a line that crosses the x -axis is the smallest counterclockwise angle from the x -axis to the line (Fig. 13). The inclination of a horizontal line is 0° . The inclination of a vertical line is 90° . If ϕ (the Greek letter phi) is the inclination of a line, then $0 \leq \phi < 180^\circ$.

The relationship between the slope m of a nonvertical line and the line's inclination ϕ is shown in Fig. 14:

$$m = \tan \phi.$$

Parallel and Perpendicular Lines

Lines that are parallel have equal angles of inclination. Hence, they have the same slope (if they are not vertical). Conversely, lines with equal slopes have equal angles of inclination and so are parallel.

If two nonvertical lines L_1 and L_2 are perpendicular, their slopes m_1 and m_2 satisfy $m_1 m_2 = -1$, so each slope is the *negative reciprocal* of the other:

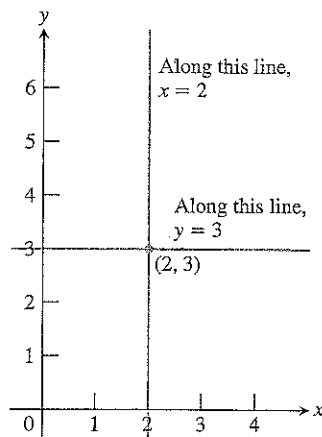
$$m_1 = -\frac{1}{m_2}, \quad m_2 = -\frac{1}{m_1}.$$

The argument goes like this: In the notation of Fig. 15, $m_1 = \tan \phi_1 = a/h$, while $m_2 = \tan \phi_2 = -h/a$. Hence, $m_1 m_2 = (a/h)(-h/a) = -1$.

Equations of Lines

Straight lines have relatively simple equations. All points on the *vertical line* through the point a on the x -axis have x -coordinates equal to a . Thus, $x = a$ is an equation for the vertical line. Similarly, $y = b$ is an equation for the *horizontal line* meeting the y -axis at b .

EXAMPLE 6 The vertical and horizontal lines through the point $(2, 3)$ have equations $x = 2$ and $y = 3$, respectively (Fig. 16).



We can write an equation for a nonvertical straight line L if we know its slope m and the coordinates of one point $P_1(x_1, y_1)$ on it. If $P(x, y)$ is *any* other point on L , then

$$\frac{y - y_1}{x - x_1} = m,$$

so that

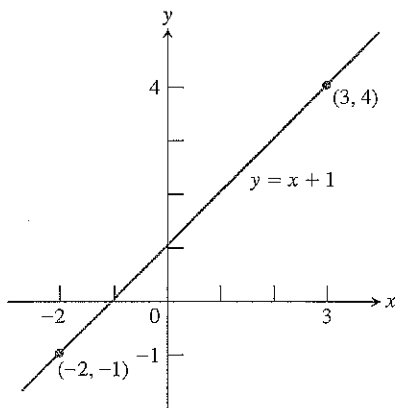
$$y - y_1 = m(x - x_1) \quad \text{or} \quad y = y_1 + m(x - x_1).$$

Definition

The equation

$$y = y_1 + m(x - x_1)$$

is the **point-slope equation** of the line that passes through the point (x_1, y_1) and has slope m .



16 The line in Example 8.

EXAMPLE 7 Write an equation for the line through the point $(2, 3)$ with slope $-3/2$.

Solution We substitute $x_1 = 2$, $y_1 = 3$, and $m = -3/2$ into the point-slope equation and obtain

$$y = 3 - \frac{3}{2}(x - 2), \quad \text{or} \quad y = -\frac{3}{2}x + 6.$$

EXAMPLE 8 Write an equation for the line through $(-2, -1)$ and $(3, 4)$.

Solution The line's slope is

$$m = \frac{-1 - 4}{-2 - 3} = \frac{-5}{-5} = 1.$$

We can use this slope with either of the two given points in the point-slope equation:

With $(x_1, y_1) = (-2, -1)$

$$y = -1 + 1 \cdot (x - (-2))$$

$$y = -1 + x + 2$$

$$y = x + 1$$

With $(x_1, y_1) = (3, 4)$

$$y = 4 + 1 \cdot (x - 3)$$

$$y = 4 + x - 3$$

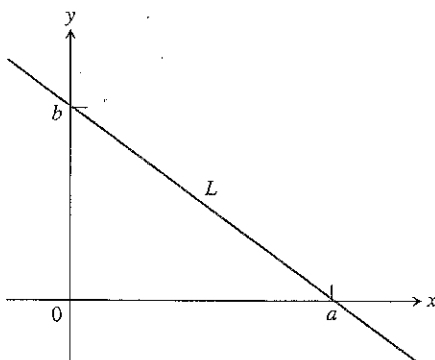
$$y = x + 1$$

Same result

Either way, $y = x + 1$ is an equation for the line (Fig. 17).

The y -coordinate of the point where a nonvertical line intersects the y -axis is called the **y -intercept** of the line. Similarly, the **x -intercept** of a nonhorizontal line is the x -coordinate of the point where it crosses the x -axis (Fig. 18). A line with slope m and y -intercept b passes through the point $(0, b)$, so it has equation

$$y = b + m(x - 0), \quad \text{or, more simply,} \quad y = mx + b.$$



17 Line L has x -intercept a and y -intercept b .

Definition

The equation

$$y = mx + b$$

is called the **slope-intercept equation** of the line with slope m and y -intercept b .

EXAMPLE 9 The line $y = 2x - 5$ has slope 2 and y -intercept -5 . □

The equation

$$Ax + By = C \quad (A \text{ and } B \text{ not both } 0)$$

is called the **general linear equation** in x and y because its graph always represents a line and every line has an equation in this form (including lines with undefined slope).

EXAMPLE 10 Find the slope and y -intercept of the line $8x + 5y = 20$.

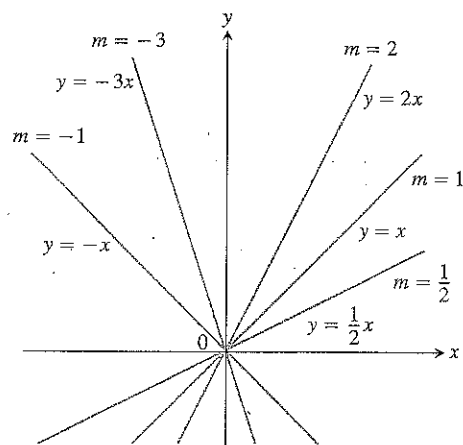
Solution Solve the equation for y to put it in slope-intercept form. Then read the slope and y -intercept from the equation:

$$\begin{aligned} 8x + 5y &= 20 \\ 5y &= -8x + 20 \\ y &= -\frac{8}{5}x + 4. \end{aligned}$$

The slope is $m = -8/5$. The y -intercept is $b = 4$. □

EXAMPLE 11 Lines through the origin

Lines with equations of the form $y = mx$ have y -intercept 0 and so pass through the origin. Several examples are shown in Fig. 19. □



19 The line $y = mx$ has slope m and passes through the origin.

Applications—The Importance of Lines and Slopes

Light travels along lines, as do bodies falling from rest in a planet's gravitational field or coasting under their own momentum (like a hockey puck gliding across the ice). We often use the equations of lines (called **linear equations**) to study such motions.

Many important quantities are related by linear equations. Once we know that a relationship between two variables is linear, we can find it from any two pairs of corresponding values just as we find the equation of a line from the coordinates of two points.

Slope is important because it gives us a way to say how steep something is (roadbeds, roofs, stairs). The notion of slope also enables us to describe how rapidly things are changing. For this reason it will play an important role in calculus.

EXAMPLE 12 Celsius vs. Fahrenheit

Fahrenheit temperature (F) and Celsius temperature (C) are related by a linear equation of the form $F = mC + b$. The freezing point of water is $F = 32^\circ$ or $C = 0^\circ$, while the boiling point is $F = 212^\circ$ or $C = 100^\circ$. Thus

$$32 = 0m + b, \quad \text{and} \quad 212 = 100m + b,$$

so $b = 32$ and $m = (212 - 32)/100 = 9/5$. Therefore,

$$F = \frac{9}{5}C + 32, \quad \text{or} \quad C = \frac{5}{9}(F - 32).$$

□

Exercises 2**Increments and Distance**

In Exercises 1–4, a particle moves from A to B in the coordinate plane. Find the increments Δx and Δy in the particle's coordinates. Also find the distance from A to B .

1. $A(-3, 2)$, $B(-1, -2)$
2. $A(-1, -2)$, $B(-3, 2)$
3. $A(-3.2, -2)$, $B(-8.1, -2)$
4. $A(\sqrt{2}, 4)$, $B(0, 1.5)$

Describe the graphs of the equations in Exercises 5–8.

5. $x^2 + y^2 = 1$
6. $x^2 + y^2 = 2$
7. $x^2 + y^2 \leq 3$
8. $x^2 + y^2 = 0$

Slopes, Lines, and Intercepts

Plot the points in Exercises 9–12 and find the slope (if any) of the line they determine. Also find the common slope (if any) of the lines perpendicular to line AB .

9. $A(-1, 2)$, $B(-2, -1)$
10. $A(-2, 1)$, $B(2, -2)$
11. $A(2, 3)$, $B(-1, 3)$
12. $A(-2, 0)$, $B(-2, -2)$

In Exercises 13–16, find an equation for (a) the vertical line and (b) the horizontal line through the given point.

13. $(-1, 4/3)$
14. $(\sqrt{2}, -1.3)$
15. $(0, -\sqrt{2})$
16. $(-\pi, 0)$

In Exercises 17–30, write an equation for each line described.

17. Passes through $(-1, 1)$ with slope -1
18. Passes through $(2, -3)$ with slope $1/2$
19. Passes through $(3, 4)$ and $(-2, 5)$
20. Passes through $(-8, 0)$ and $(-1, 3)$
21. Has slope $-5/4$ and y -intercept 6
22. Has slope $1/2$ and y -intercept -3
23. Passes through $(-12, -9)$ and has slope 0

24. Passes through $(1/3, 4)$ and has no slope
25. Has y -intercept 4 and x -intercept -1
26. Has y -intercept -6 and x -intercept 2
27. Passes through $(5, -1)$ and is parallel to the line $2x + 5y = 15$
28. Passes through $(-\sqrt{2}, 2)$ parallel to the line $\sqrt{2}x + 5y = \sqrt{3}$
29. Passes through $(4, 10)$ and is perpendicular to the line $6x - 3y = 5$
30. Passes through $(0, 1)$ and is perpendicular to the line $8x - 13y = 13$

In Exercises 31–34, find the line's x - and y -intercepts and use this information to graph the line.

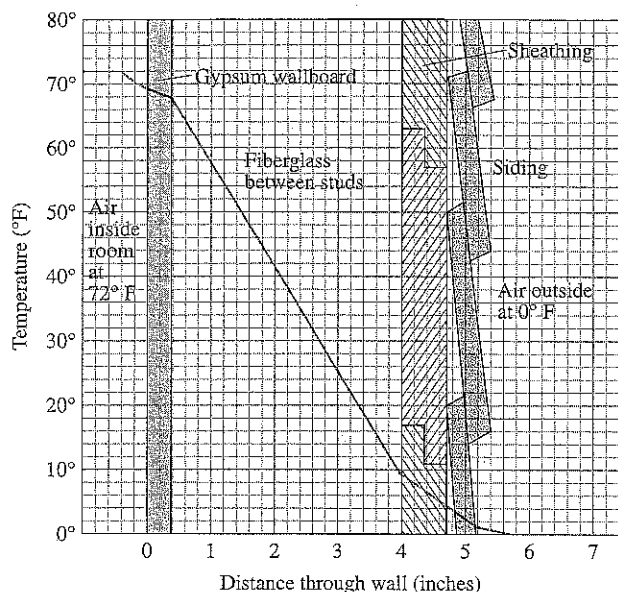
31. $3x + 4y = 12$
32. $x + 2y = -4$
33. $\sqrt{2}x - \sqrt{3}y = \sqrt{6}$
34. $1.5x - y = -3$
35. Is there anything special about the relationship between the lines $Ax + By = C_1$ and $Bx - Ay = C_2$ ($A \neq 0$, $B \neq 0$)? Give reasons for your answer.
36. Is there anything special about the relationship between the lines $Ax + By = C_1$ and $Ax + By = C_2$ ($A \neq 0$, $B \neq 0$)? Give reasons for your answer.

Increments and Motion

37. A particle starts at $A(-2, 3)$ and its coordinates change by increments $\Delta x = 5$, $\Delta y = -6$. Find its new position.
38. A particle starts at $A(6, 0)$ and its coordinates change by increments $\Delta x = -6$, $\Delta y = 0$. Find its new position.
39. The coordinates of a particle change by $\Delta x = 5$ and $\Delta y = 6$ as it moves from $A(x, y)$ to $B(3, -3)$. Find x and y .
40. A particle started at $A(1, 0)$, circled the origin once counterclockwise, and returned to $A(1, 0)$. What were the net changes in its coordinates?

Applications

41. *Insulation.* By measuring slopes in Fig. 20, estimate the temperature change in degrees per inch for (a) the gypsum wallboard; (b) the fiberglass insulation; (c) the wood sheathing. (Graphs can shift in printing, so your answers may differ slightly from those in the back of the book.)

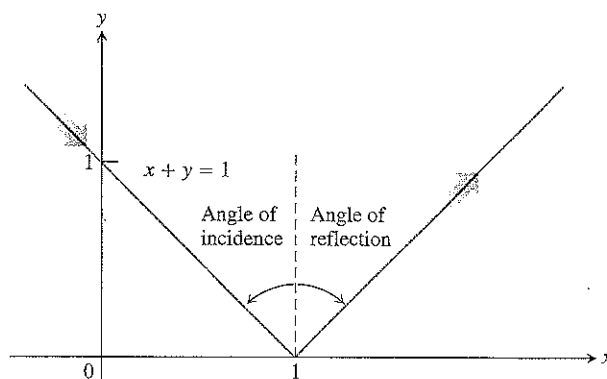


20 The temperature changes in the wall in Exercises 41 and 42. (Source: *Differentiation*, by W. U. Walton et al., Project CALC, Education Development Center, Inc., Newton, Mass. [1975], p. 25.)

42. *Insulation.* According to Fig. 20, which of the materials in Exercise 41 is the best insulator? the poorest? Explain.
43. *Pressure under water.* The pressure p experienced by a diver under water is related to the diver's depth d by an equation of the form $p = kd + 1$ (k a constant). At the surface, the pressure is 1 atmosphere. The pressure at 100 meters is about 10.94 atmospheres. Find the pressure at 50 meters.
44. *Reflected light.* A ray of light comes in along the line $x + y = 1$ from the second quadrant and reflects off the x -axis (Fig. 21). The angle of incidence is equal to the angle of reflection. Write an equation for the line along which the departing light travels.
45. *Fahrenheit vs. Celsius.* In the FC -plane, sketch the graph of the equation

$$C = \frac{5}{9}(F - 32)$$

linking Fahrenheit and Celsius temperatures (Example 12). On the same graph sketch the line $C = F$. Is there a temperature at which a Celsius thermometer gives the same numerical reading as a Fahrenheit thermometer? If so, find it.



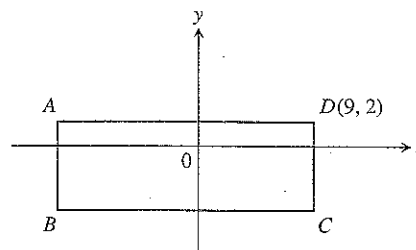
21 The path of the light ray in Exercise 44. Angles of incidence and reflection are measured from the perpendicular.

46. *The Mt. Washington Cog Railway.* Civil engineers calculate the slope of roadbed as the ratio of the distance it rises or falls to the distance it runs horizontally. They call this ratio the **grade** of the roadbed, usually written as a percentage. Along the coast, commercial railroad grades are usually less than 2%. In the mountains, they may go as high as 4%. Highway grades are usually less than 5%.

The steepest part of the Mt. Washington Cog Railway in New Hampshire has an exceptional 37.1% grade. Along this part of the track, the seats in the front of the car are 14 ft above those in the rear. About how far apart are the front and rear rows of seats?

Theory and Examples

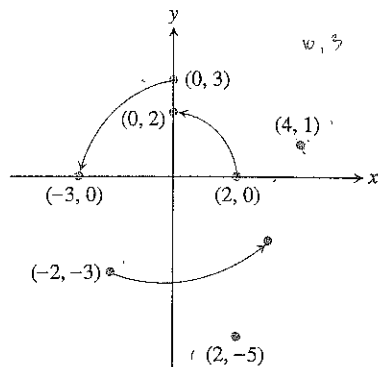
47. By calculating the lengths of its sides, show that the triangle with vertices at the points $A(1, 2)$, $B(5, 5)$, and $C(4, -2)$ is isosceles but not equilateral.
48. Show that the triangle with vertices $A(0, 0)$, $B(1, \sqrt{3})$, and $C(2, 0)$ is equilateral.
49. Show that the points $A(2, -1)$, $B(1, 3)$, and $C(-3, 2)$ are vertices of a square, and find the fourth vertex.
50. The rectangle shown here has sides parallel to the axes. It is three times as long as it is wide, and its perimeter is 56 units. Find the coordinates of the vertices A , B , and C .



51. Three different parallelograms have vertices at $(-1, 1)$, $(2, 0)$, and $(2, 3)$. Sketch them and find the coordinates of the fourth vertex of each.

52. A 90° rotation counterclockwise about the origin takes $(2, 0)$ to $(0, 2)$, and $(0, 3)$ to $(-3, 0)$, as shown in Fig. 22. Where does it take each of the following points?

- a) $(4, 1)$ b) $(-2, -3)$ c) $(2, -5)$
 d) $(x, 0)$ e) $(0, y)$ f) (x, y)
 g) What point is taken to $(10, 3)$?



- 22 The points moved by the 90° rotation in Exercise 52.
 53. For what value of k is the line $2x + ky = 3$ perpendicular to the line $4x + y = 1$? For what value of k are the lines parallel?

54. Find the line that passes through the point $(1, 2)$ and through the point of intersection of the two lines $x + 2y = 3$ and $2x - 3y = -1$.

55. Show that the point with coordinates

$$\left(\frac{x_1 + x_2}{2}, \frac{y_1 + y_2}{2} \right)$$

is the midpoint of the line segment joining $P(x_1, y_1)$ to $Q(x_2, y_2)$.

56. The distance from a point to a line. We can find the distance from a point $P(x_0, y_0)$ to a line $L: Ax + By = C$ by taking the following steps (there is a somewhat faster method in Section 10.5):

1. Find an equation for the line M through P perpendicular to L .
2. Find the coordinates of the point Q in which M and L intersect.
3. Find the distance from P to Q .

Use these steps to find the distance from P to L in each of the following cases.

- a) $P(2, 1)$, $L: y = x + 2$
 b) $P(4, 6)$, $L: 4x + 3y = 12$
 c) $P(a, b)$, $L: x = -1$
 d) $P(x_0, y_0)$, $L: Ax + By = C$

3

Functions

Functions are the major tools for describing the real world in mathematical terms. This section reviews the notion of function and discusses some of the functions that arise in calculus.

Functions

The temperature at which water boils depends on the elevation above sea level (the boiling point drops as you ascend). The interest paid on a cash investment depends on the length of time the investment is held. In each case, the value of one variable quantity, which we might call y , depends on the value of another variable quantity, which we might call x . Since the value of y is completely determined by the value of x , we say that y is a function of x .

The letters used for variable quantities may come from what is being described. When we study circles, we usually call the area A and the radius r . Since $A = \pi r^2$, we say that A is a function of r . The equation $A = \pi r^2$ is a *rule* that tells how to calculate a *unique* (single) output value of A for each possible input value of the radius r .

The set of all possible input values for the radius is called the **domain** of the function. The set of all output values of the area is the **range** of the function. Since circles cannot have negative radii or areas, the domain and range of the circle area function are both the interval $[0, \infty)$, consisting of all nonnegative real numbers.

The domain and range of a mathematical function can be any sets of objects; they do not have to consist of numbers. Most of the domains and ranges we will encounter in this book, however, will be sets of real numbers.